

Grade 2 – bilingual class





Mathematics

If you cannot print this page, write the answers on your yellow book.

Homework for friday, 20th March 2020

Exercise 1 : For each word problem, draw and calculate to find the answer :

Exercise 2 : Compare the numbers, using the signs < , > or = :

<p>1 I have 4 pencils. Jack has 7 pencils. How many pencils do Jack and I have altogether?</p> 	<p>2 A squirrel has 9 nuts. He finds 8 more. How many nuts does he have now?</p> 
<p>3 There are 9 bees in the hive. 4 more fly in. How many bees are in the hive in all?</p> 	<p>4 Dad gives Max 6 treats. I give him 7 treats. How many treats did Max get?</p> 

- a. 545 ___ 534
- b. 674 ___ 676
- c. 599 ___ 595
- d. 287 ___ 287
- e. 535 ___ 553
- f. 448 ___ 484

- g. 882 ___ 828
- h. 656 ___ 562
- i. 737 ___ 735
- j. 945 ___ 954
- k. 870 ___ 807
- l. 633 ___ 633

- m. 344 ___ 423
- n. 644 ___ 624
- o. 582 ___ 833
- p. 763 ___ 763
- q. 882 ___ 828
- r. 797 ___ 577

Exercise 3 : Complete the calculation to count the ice creams :



a. + + =
or X =

There are Ice creams.



b. + + =
or X =

There are Ice creams.

MULTIPLICATION TABLE OF 2		
0X2=	4X2=	8X2=
1X2=	5X2=	9X2=
2X2=	6X2=	10X2=
3X2=	7X2=	LEARN YOUR TABLE 😊

Exercise 4 : Write these numbers in letters :

- 10 :
- 20 :
- 30 :
- 40 :
- 50 :

- 60 :
- 70 :
- 80 :
- 90 :
- 100 :

Send me a picture of your work when you are done. Teacher Pauline