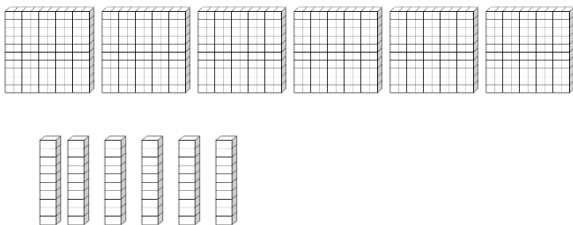


**1/Complète, remplis le tableau et écris le nombre qui correspond :**

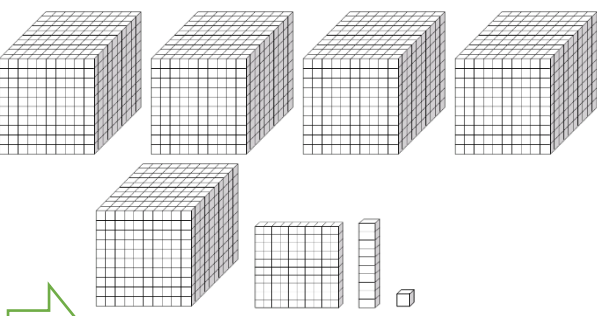
**A**



m	c	d	u

⇒ .....

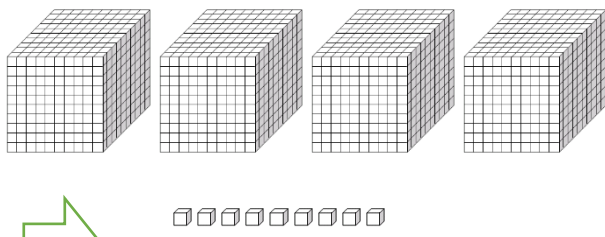
**B**



m	c	d	u

⇒ .....

**C**



...	c	...	u

⇒ .....

**2/Ecris le nombre qui correspond :**

- |                     |                  |                     |
|---------------------|------------------|---------------------|
| 2d 0u = .....       | 1d 3u = .....    | 9d 9u = .....       |
| 3c 4d 8u = .....    | 2c 0d 7u = ..... | 1c 5d 6u = .....    |
| 8c 0d 0u = .....    | 6c = .....       | 7c 6d 6u = .....    |
| 9m 2c 0d 8u = ..... | 4c 5d 3u = ..... | 6m 1c 7d 7u = ..... |

**CORRIGES 1/A=660 B=5 111 C=4 009**

9m 2c 0d 8u = ...9 208	1m 4c 5d 3u = ...1 453	6m 1c 7d 7u = ...6 177
8c 0d 0u = ...800	6c = ...600	7c 6d 6u = ...766
3c 4d 8u = ...348	2c 0d 7u = ...207	1c 5d 6u = ...156
2 / 2d 0u = ...20	1d 3u = ...13	9d 9u = ...99