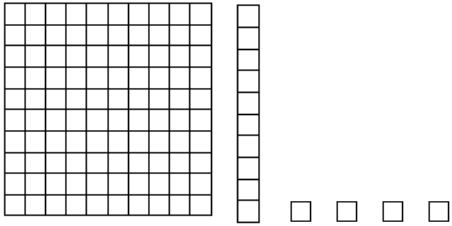


1/Complète et remplis le tableau et écrit le nombre qui correspond :


A



c	d	u

⇒

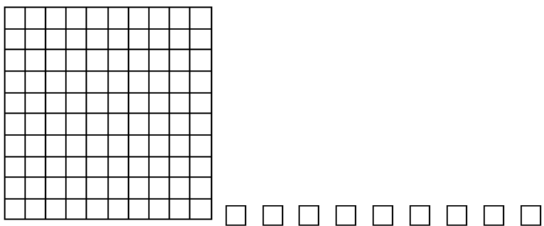
B



	d	u

.....

C



c		u

.....

2/Ecris le nombre qui correspond :

- | | | |
|------------------|------------------|-------------------|
| 1c 3d 9u = | 1c 0d 1u = | 4c 4d 4u = |
| 9c 4d 3u = | 9c = | 6d 7d 0u = |
| 5c 0d 0u = | 1c = | 2c 6d 2u = |
| 1c 1d 0u = | 8c 1d 3u = | 10c 1d 6u = |

1c 1d 0u = 110	8c 1d 3u = 813	10c 1d 6u = 1016
5c 0d 0u = 500	1c = 100	2c 6d 2u = 262
9c 4d 3u = 943	9c = 900	6d 7d 0u = 670
2 / 1c 3d 9u = 139	1c 0d 1u = 101	4c 4d 4u = 444

CORRIGES 1/A= 114 B=241 C=109