




Découvrir

À chacun sa maison ?


Complète la phrase par *oui* ou par *non*.

Puis écris < ou > dans la case.

Il y a plus d'oiseaux que de nids. _____




8




6

Il y a moins de chiens que de niches. _____



7




8




S'entraîner




1 Dessine plus d'enveloppes que de timbres.



2 Dessine des points sur les dés d'Anaïs pour que la phrase soit vraie.




Martin






Anaïs

C'est Martin qui a gagné car $3 > 6$.



Martin





Anaïs

C'est Anaïs qui a gagné car $5 < 1$.

3 Invente une partie.



Martin



Anaïs

C'est _____ qui a gagné car $_____ < _____$.